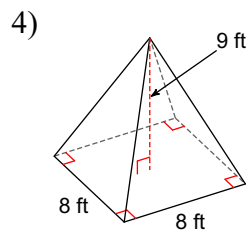
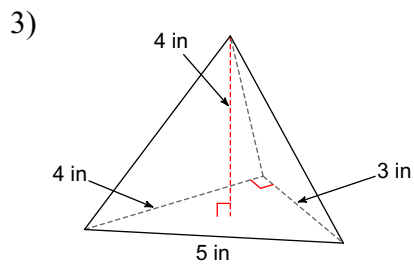
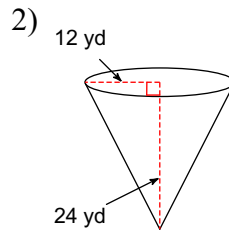
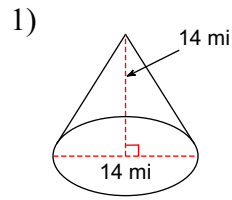
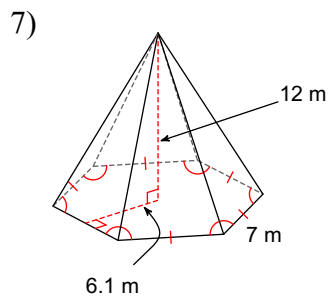
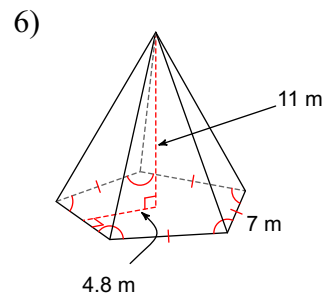
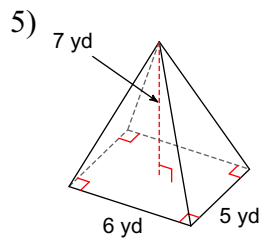


# Unit 8.4 Volume of Pyramids and Cones EXAMPLES

**Find the volume of each figure. Round your answers to the nearest hundredth, if necessary. Leave your answers in terms of  $\pi$  for answers that contain  $\pi$ .**





### Unit 8.4 Volume of Pyramids and Cones EXAMPLES

**Find the volume of each figure. Round your answers to the nearest hundredth, if necessary. Leave your answers in terms of  $\pi$  for answers that contain  $\pi$ .**

