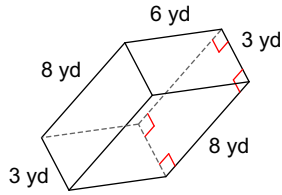


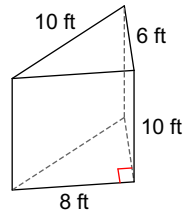
PRACTICE Quiz 8.3 - 8.4 Volume

Find the volume of each figure. Round your answers to the nearest tenth, if necessary. Leave your answers in terms of π for answers that contain π .

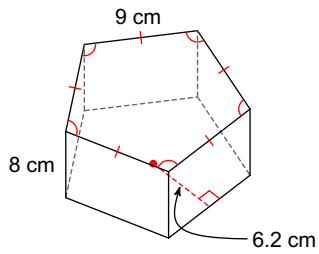
1)



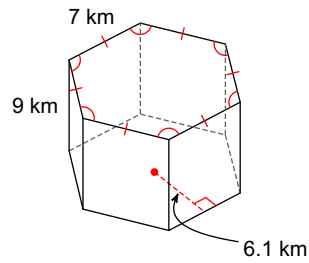
2)



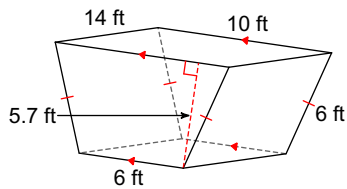
3)



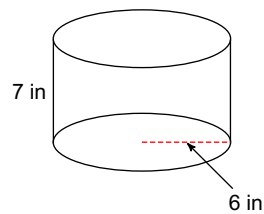
4)



5)

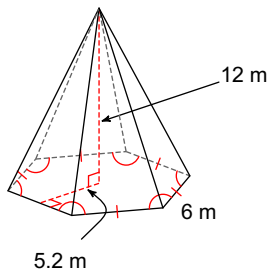


6)

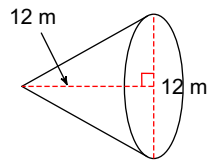


Find the volume of each figure. Round your answers to the nearest hundredth, if necessary. Leave your answers in terms of π for answers that contain π .

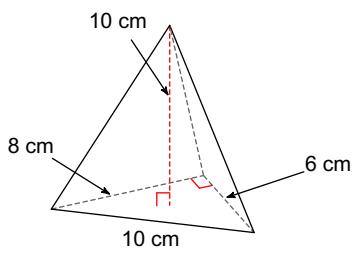
7)



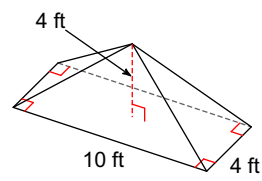
8)



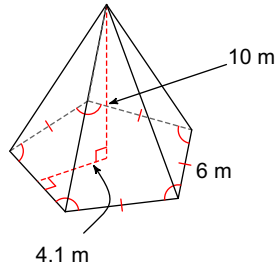
9)



10)



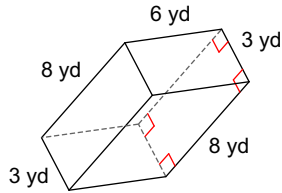
11)



PRACTICE Quiz 8.3 - 8.4 Volume

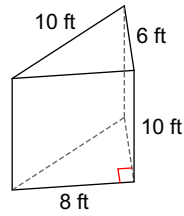
Find the volume of each figure. Round your answers to the nearest tenth, if necessary. Leave your answers in terms of π for answers that contain π .

1)



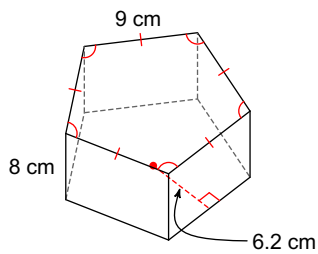
144 yd^3

2)



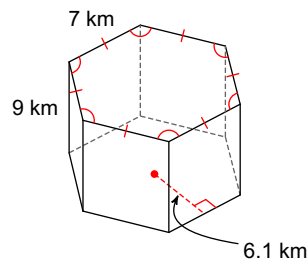
240 ft^3

3)



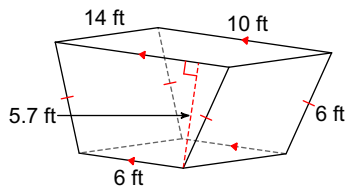
1116 cm^3

4)



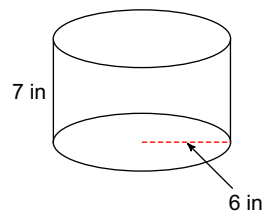
1152.9 km^3

5)



638.4 ft^3

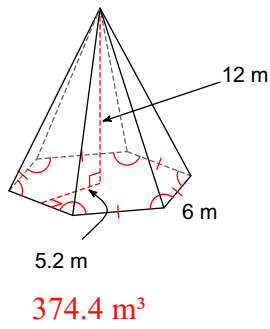
6)



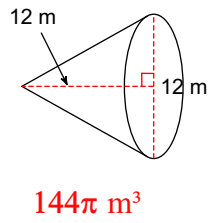
$252\pi \text{ in}^3$

Find the volume of each figure. Round your answers to the nearest hundredth, if necessary. Leave your answers in terms of π for answers that contain π .

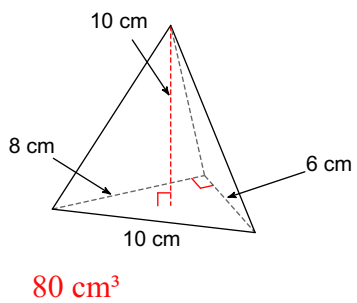
7)



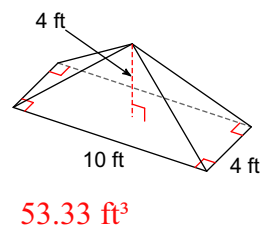
8)



9)



10)



11)

