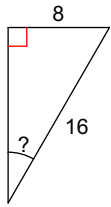


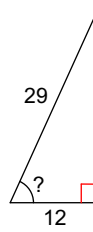
# PRACTICE Quiz 7.1 - 7.2 Trig Ratios

**Find the measure of the indicated angle to the nearest degree.**

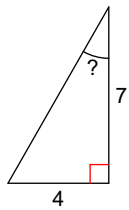
1)



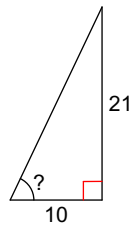
2)



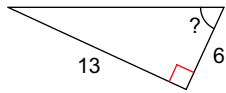
3)



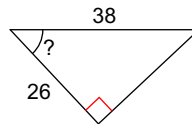
4)



5)

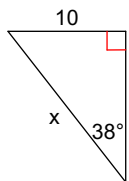


6)

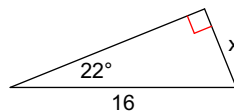


**Find the missing side. Round to the nearest tenth.**

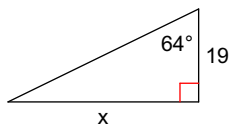
7)



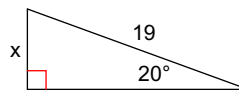
8)



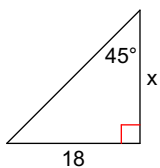
9)



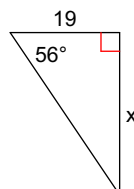
10)



11)



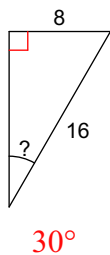
12)



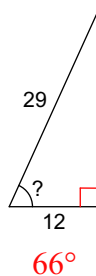
# PRACTICE Quiz 7.1 - 7.2 Trig Ratios

**Find the measure of the indicated angle to the nearest degree.**

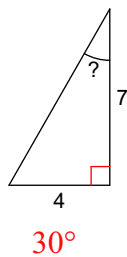
1)



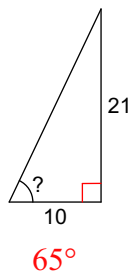
2)



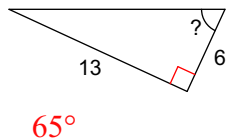
3)



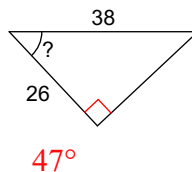
4)



5)

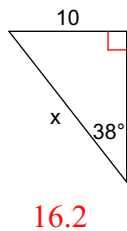


6)

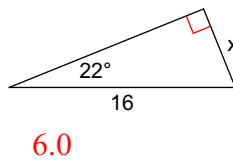


**Find the missing side. Round to the nearest tenth.**

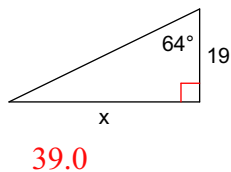
7)



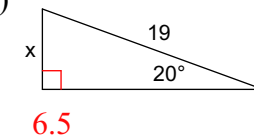
8)



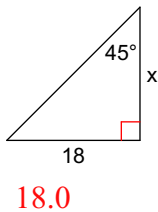
9)



10)



11)



12)

