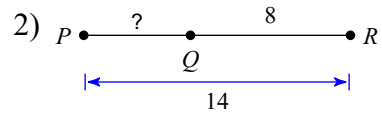
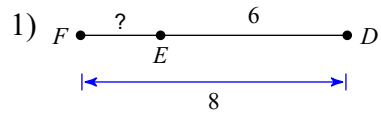
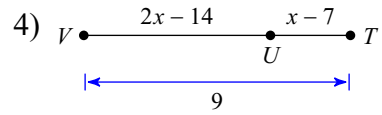
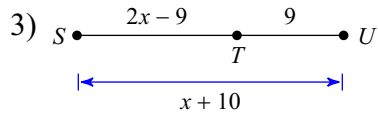
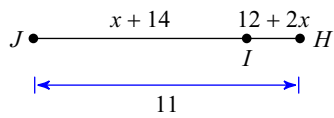
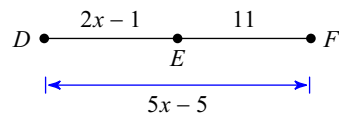
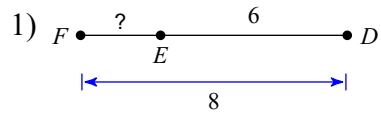


## PRACTICE Quiz 6.2 Segment Addition Postulate

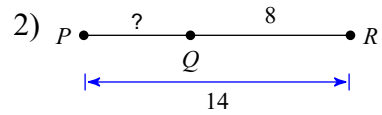
**Find the length indicated.****Solve for  $x$ .****Find the length indicated.**5) Find  $JI$ 6) Find  $DE$ 

## PRACTICE Quiz 6.2 Segment Addition Postulate

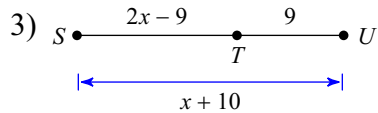
Find the length indicated.



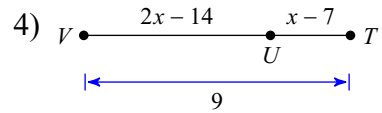
2



6

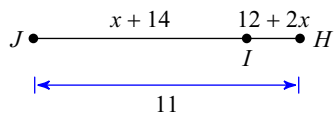
Solve for  $x$ .

10

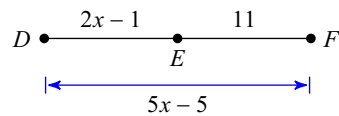


10

Find the length indicated.

5) Find  $JI$ 

9

6) Find  $DE$ 

9